



VIDURA COLLEGE - Colombo
3rd Term
Mathematics- Revision Paper
Grade 2

Name:

Class:

1. Write the number that comes before.


a) 67 -

b) 45 -

c) 30 --

d) 81 --

2. Write the answers according to the calendar given below.



a) Write the number of days of the week.

.....

b) Write the days you attend to zoom classes.

.....

.....

c) Write the day comes before Wednesday.

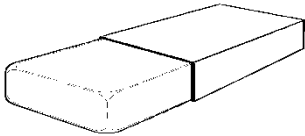
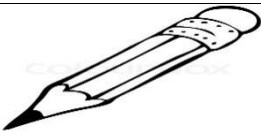
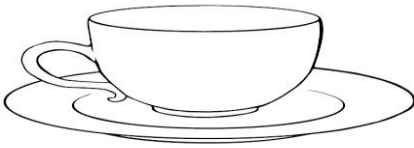
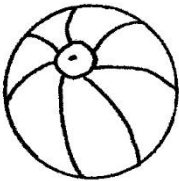
.....

d) Write the day comes after Saturday.

.....

e) How many days are there in a week?

3. Draw the coins that you use to pay for the following items.

| Item | price | Coin/ coins |
|---|----------|-------------|
|  | Rs.2.00 | |
|  | Rs.5.00 | |
|  | Rs.20.00 | |
|  | Rs.7.00 | |

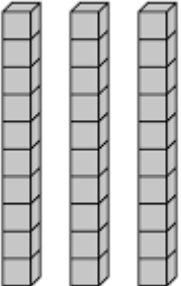
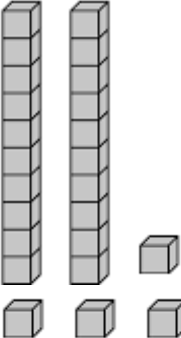
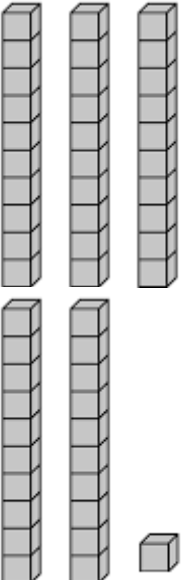
4. Arrange the following numbers from the smallest to the biggest.

a)14,10,58,23 -.....

b)67,33,52,9 -.....

c)16,72,96,64 -.....

5. Complete the following table.

| | Tens | Units | Number |
|---|------|-------|--------|
|  | | | |
|  | | | |
|  | | | |